

Egypt Map Checklist:

Create a hand-drawn map of Egypt. Label with the following bodies of water, landforms, and cities.

Bodies of Water:


Mediterranean Sea

Red Sea

Persian Gulf

Nile River

Blue Nile/White Nile

 1st, 2nd, 3rd, 4th, 5th, 6th, Cataract

Landforms/Regions:

Nile Delta

Ethiopian Highlands

Sinai Peninsula

Libyan Desert

Arabian Desert

Nubian Desert

Cities:

Giza

Aswan

Luxor


Alexandria

Countries: (All CAPS)

EGYPT

SUDAN

ETHIOPIA

Draw a  near the city of Giza and near the 2nd cataract.

Label the pyramid near Giza the *Great Pyramid*.

Label the pyramid near the 2nd cataract *Valley of the Kings*.

Color the Nile River and surrounding bodies of water blue

Shade in the area around the Nile River yellow to show the fertile soil.

Color each country a different color.

Make a key with the following items:



Pyramid



Fertile soil



Desert



Water



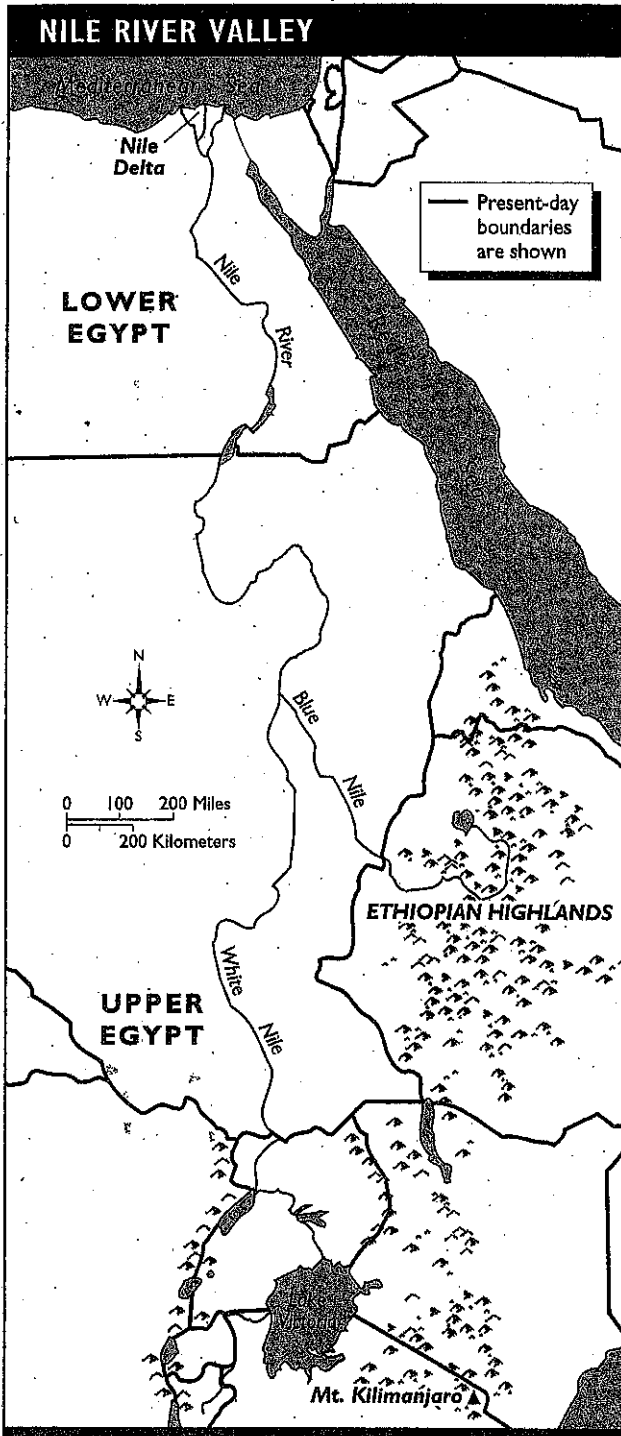
Mountains



Cataracts

THE NILE RIVER

You have been asked to write an entry about the Nile River for the *Geography Book of Records*. Use the outline map and the categories below to write your entry.



LENGTH: _____

LOCATION: _____

DIRECTION IT FLOWS: _____

WHERE IT EMPTIES: _____

FLOOD SEASON: _____

IMPORTANCE TO ANCIENT EGYPT: _____

LANDSCAPE OF NILE REGION: _____

